

*For the questions from 1 to 5, choose the most appropriate answer form the brackets.

-is the smallest administrative unit in which the school is located.
(Distric / Province / Grama Niladhari Division)
- Katunayake international AirPort is located in district.
(Gampaha / Kalutara / Galle)
- Anemometer is used to measure..... (Wind speed / Wind direction /Temperature)
- According to the nature of land, cultivation is done in hilly areas.
(coconut / tea and rubber / paddy)
- island is located in the Atlantic Ocean. (Madagascar / Taiwan / cuba)

* For questions from 6 to 10, read the statement and write(T) if it is true and write (F) if it is false.

- State Osu Sala provide medicines for concessionary prices to the public. (.....)
- Rainfall is measured by millimeters. (.....)
- Hindu people celebrate hajj festival. (.....)
- North-East direction is located between East and South. (.....)
- + - - + - - + - - + this symbol shows provincial boundary. (.....)

*For the questions from 11 to 15, underline the most appropriate answer.

- A type of fertilizer that can be made form discarded materials of domestic units and dead plant materials is.....
I. Chemical fertilizer II. Compost fertilizer
III. Inorganic fertilizer IV. Animal waste
- What is the power / energy that man used in ancient time?
I. Solar energy II. Manual power III. Fuel IV. Animal power
- The province that comprises the highest number of districts is....
I. Norhtern Province II. North Central Province
III. Central Province IV. Sabaragamuwa Province
- Place / region where famous for mat industry is...
I. Pilimathalawa II. Ambalangoda III. Bangadeniya IV. Dumbara
- The bay which is located in between India and Sri Lanka is...
I. Bay of Bengal II. Mannar Bay III. Arugam Bay IV. Weligama Bay

For the questions from 16 to 20, match A and B Columns.

| A. | B. |
|--|--------------|
| 16. World's largest island | Anuradhapura |
| 17. An interchange of southern express way | Greenland |
| 18. The centre of ancient hydraulic civilization | Nitrogen |
| 19. The gas need for the growth of plants | Compass |
| 20. The device that is used to identify the directions | Kottawa |
| | Sri Lanka |

(2 x 20 = 40 Marks)

Part - II

***First question is compulsory.** It consists of part A and B.

From questions 2 to 8, choose **four** questions only.

Answer **five** questions altogether.

1. A. Answer the following questions based on the map of Sri Lanka. (05 marks)

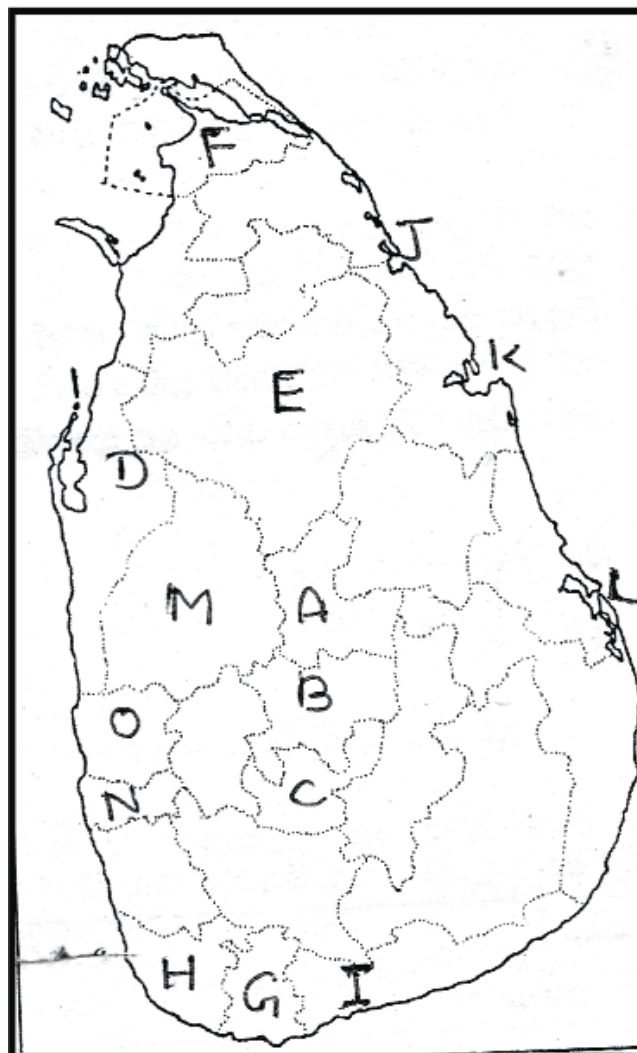
I. Which letter shows the district where your school is located among letters A, B and C?

II. Which letter denotes / shows a district of Northern Province among letters D, E and F?

III. Which letter depicts / shows Dutch Fort among letters G, H and I?

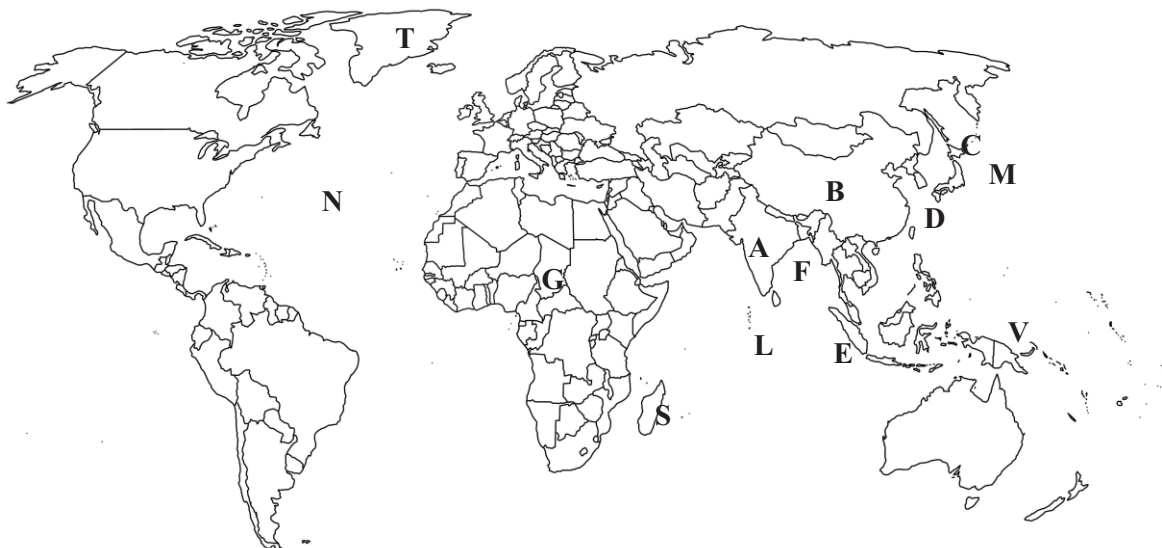
IV. Which letter shows Trincomalee bay among letters J, K and L?

V. Which letter denotes the administrative capital among letters M, N and O?



B. Answer the following questions based on the map of world.

(05 marks)



I. Which letter shows India among letters A, B and C?

.....

II. Which letter denotes Bay of Bengal among letters D, E and F?

.....

III. Which continent depicts by letter G?

.....

IV. Which letter shows Indian Ocean among letters L, M and N?

.....

V. Which letter depicts Madagascar Island among letters S, T and V?

.....

02. I. What is meant by 'Weather'?

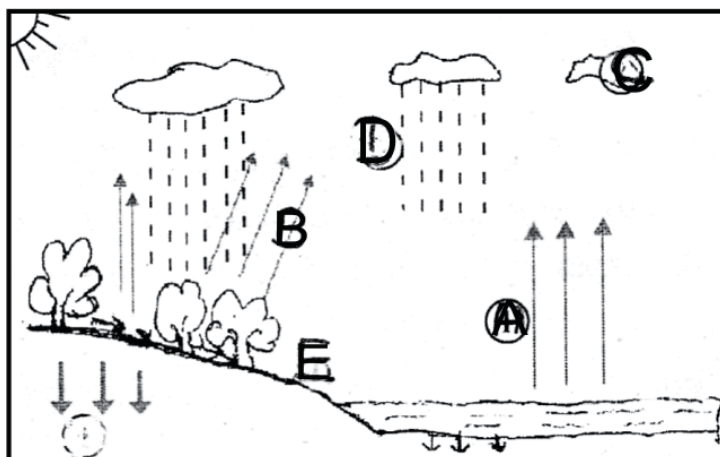
(02 marks)

II. Write three advantages of knowing the weather conditions / information.

(03 marks)

III. Identify and name the main processes (from A to E) of water cycle.

(05 marks)



A.....

B.....

C.....

D.....

E.

03. I. Write two natural geographical features that can be identified in the immediate surrounding of your school. (02 marks)
- II. Write three advantages of plants. (03 marks)
- III. Write an advantage of the following animals. (05 marks)
- A) Termite
- B) Earthworm.....
- C) Bat.....
- D) Parrot.....
- E) Crow-pheasant.....
4. I. Name two ethnic groups live in your village. (02 marks)
- II. Name three vegetables that cultivated in the Dry zone of Sri Lanka. (03 marks)
- III. Write five uses / utilizations of the land. (05 marks)
5. I. Write two environmental friendly waste disposal methods. (02 marks)
- II. Write three reasons for increasing demand for energy. (03 marks)
- III. Write five effective use of energy at home. (05 marks)
6. I. Write two diseases occur due to atmospheric pollution. (02 marks)
- II. Write three materials that can be used to make a bio gas unit. (03 marks)
- III. Fill in the following Cross-word puzzle with the help of the given clues. (05 marks)
1. Beautify the environment
 2. A poisonous reptile.
 3. A migrant bird
 4. Spread diseases such as dengue, Malaria.
 5. Forecast the weather.
-
7. I. Name two forms of water out of three. (02 marks)
- II. Write three problems arising with shortage of water. (03 marks)
- III. Write five methods of water conservation. (05 marks)
8. I. Name the narrow sea passage that separate Sri Lanka from India and write the distance of the narrowest place between Sri Lanka and India. (02 marks)
- II. Name three important places located in Sri Lanka. (03 marks)
- III. Write a short description on the topic 'Rapidly Developing Sri Lanka' (05 marks)