

# KG/MW/AL AZHAR COLLEGE

GRADE – 06 MATHS (EM)

TEACHER. M.A.H.F.SAFRINA

2<sup>nd</sup> TERM

CHAPTER – 09


FRACTIONS



1 - One



1/2 - One Half or Half



1/3 - One Third



1/4 - One Fourth or Quarter



2/3 - Two Third



3/4 - Three Fourth or Three Quarter

## Way of Reading

**Proper Fractions:** - Less Than One and Greater Than Zero

**Example:-**


1/2, 1/4, 2/3, 3/8

# Work Sheet – 01

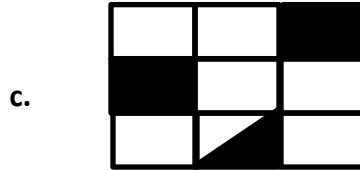
(01) Write down the colored quantity as a fraction.




-----



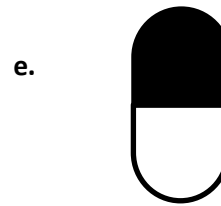
-----



-----



-----



-----

(02) Fill in the blanks given below.

Re-presented Quantity

Quantity as a Fraction

The way of reading



$3/10$

-----



-----

-----



-----

-----

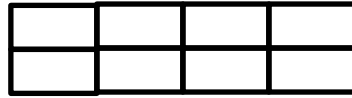


$2/3$

-----



-----  
**(03) This is a picture of a chocolate bar divided in to eight equal parts.**




- a. Colors three pieces of chocolate.
- b. Write down the colored parts as a fraction. -----
- c. Write down the parts that without colored as a fraction. -----

**(04) Link**




$5/6$



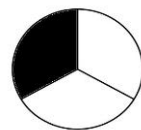
$1/3$



$3/8$



$3/5$



$1/4$