



Provincial Department of Education Sabaragamuwa Week School

November – 2nd Week

Subject: English

Grade: 10

Prepared by – Ms. L.K.T.M Jayathissa

Kg/Dehi/ Ambalampitiya M.V.

Miss. M.G.T.R.Dharmarathne

Kg/Dehi/ Wilagama K.V.

Competency Levels – 5.3- Transfer information into other forms.

7.7- Writes for official purposes.

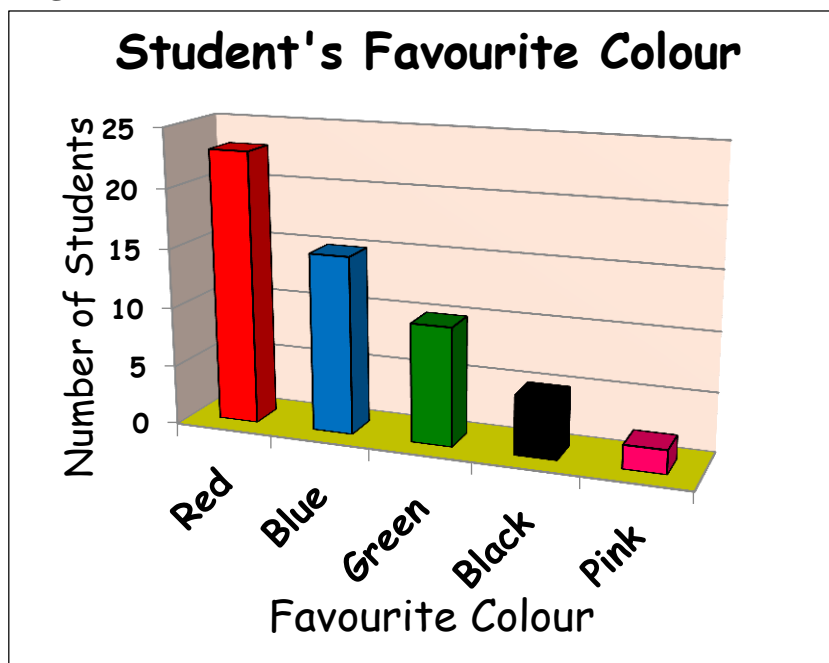
6.8- Uses conjunctions and joining words appropriately.

Pre – learning activity

- **Gather information about favourite sports of the students in your class. Then draw a graph on the box given below and enter the collected data into the graph.**
- **Answer the questions given below by paying your attention to the graph you have drawn on the above box.**
 - a) What does the graph show?
 - b) What does the horizontal axis represent?
 - c) What does the vertical axis depict?
 - d) What is the most popular sport?
 - e) What is the least popular sport?

Activity 01

Study the following bar chart.



I. Study the above given bar chart and fill in the blanks.

- The above graph depicts the favourite of grade 05 students of Sujatha Girl's College, Kurunegala.
- The horizontal axis represents their while the vertical axis shows the
- Most popular colour is And the least popular colour is
- Fifteen students like while ten students like
- Blue is more popular than whereas black is less popular than

II. Answer the questions.

- What is the most popular colour among the students in grade 05 class?
- Which colour is the least popular among them?
- How many students like black ?
- What is the less popular than black?
- What colours are more popular than green?

Activity 02

Read the given words below and find meanings using a dictionary.

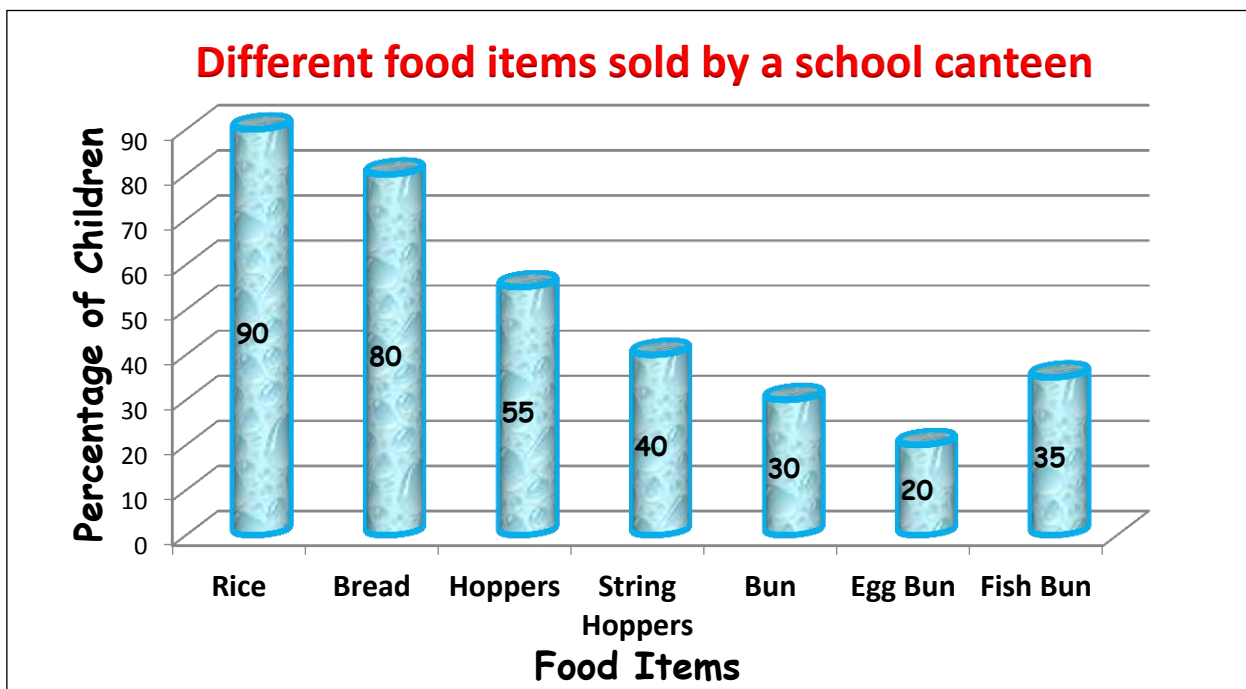
many, most, least, some, a few, activity, equal, number of students

Activity 03

Complete the description in **Activity 02** in **Unit 07** on **page 66** using above learnt words. Write it in your book.

Activity 04

The bar chart below gives information about the different food items sold by a school canteen. Study the chart and match the answers with the questions.



- What does the graph show?
- What does the vertical axis represent?
- What does the horizontal axis represent?
- What is the most eaten food item?
- What is the least eaten food item?
- What is eaten by more children?
- How many children eat fish bun?

Bread
Egg Bun
Rice
About twenty five
Food sold in school canteen
Food items
Percentage of children

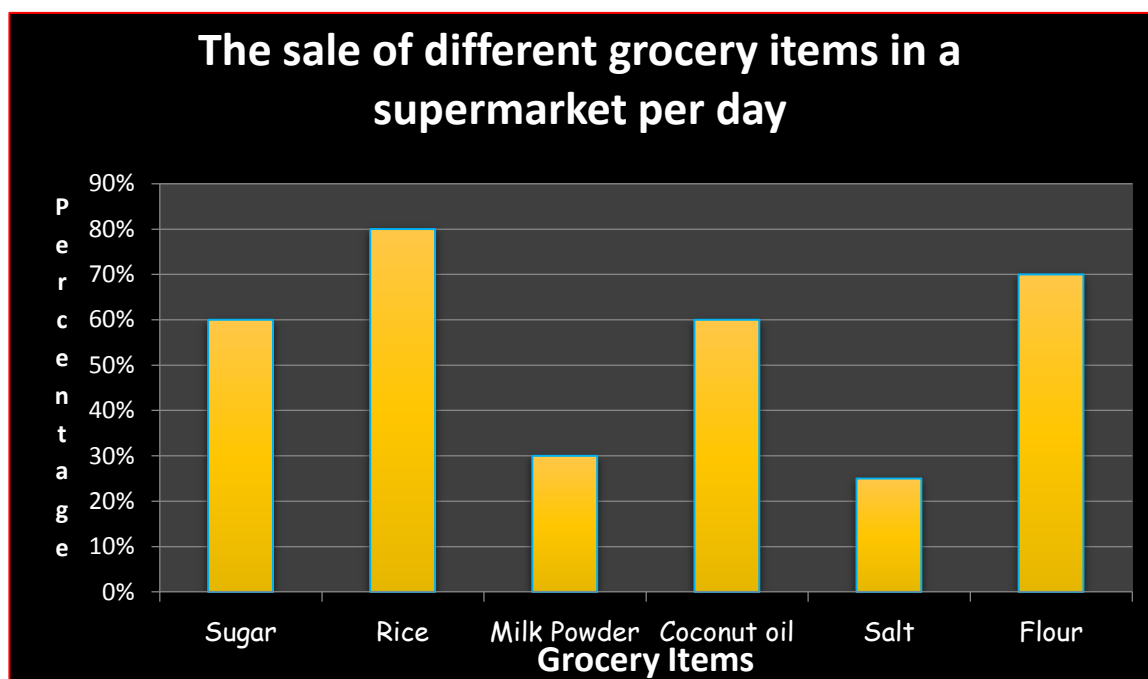
Activity 05

Do **Activity 03** in **Unit 07** on **page 67**. (The description you completed on page 66 will help you.)

Post learning activities

- Describe the given bar graph in **Activity 06** in **Unit 08** on **page 85**.
- The following bar graph shows the percentage of the sale of different grocery items in a supermarket per day. Study the bar graph and write a description about it. The words given in the box will help you.

less than , lowest sale , highest sale , maximum , minimum , equal amount



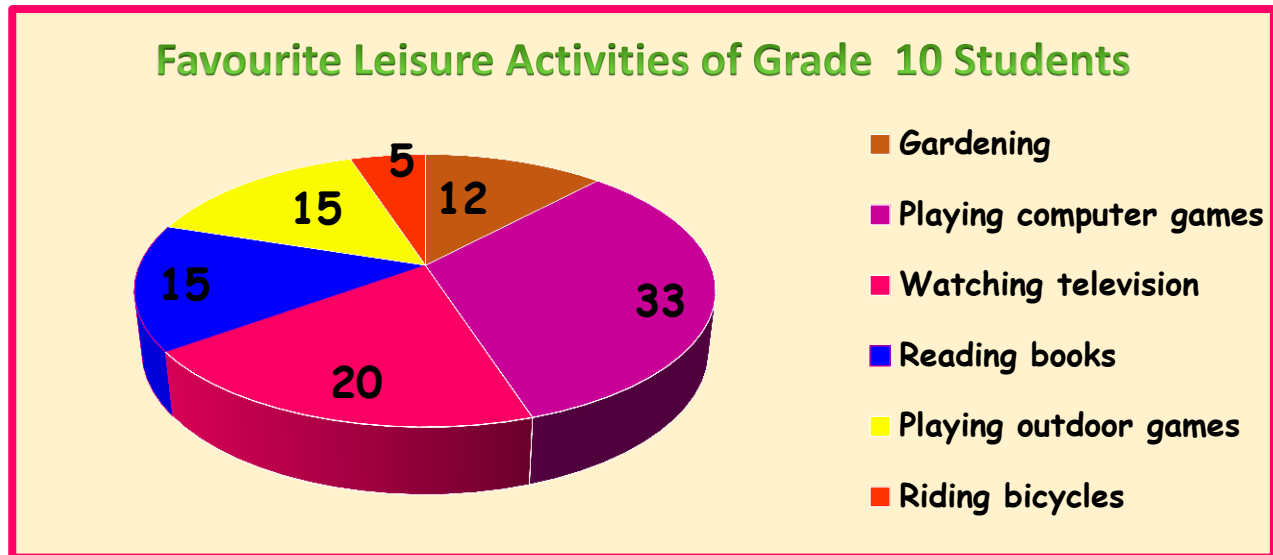
Websites, LMS lessons and learning materials that can be used for the above activities.

- ❖ E – nenapiyasa – Grade 10 English - [:/ https://youtu.be/ Pu_OSeGm6w](https://youtu.be/Pu_OSeGm6w)
- ❖ You tube - https://www.youtube.com/results?search_query=bar+graph+grade+10

Assessment

01. This pie chart shows the results of a survey conducted among 100 grade 10 students about their favourite leisure activity. Study the chart and write a description. Use about 100 words. You may use the following words/phrases.

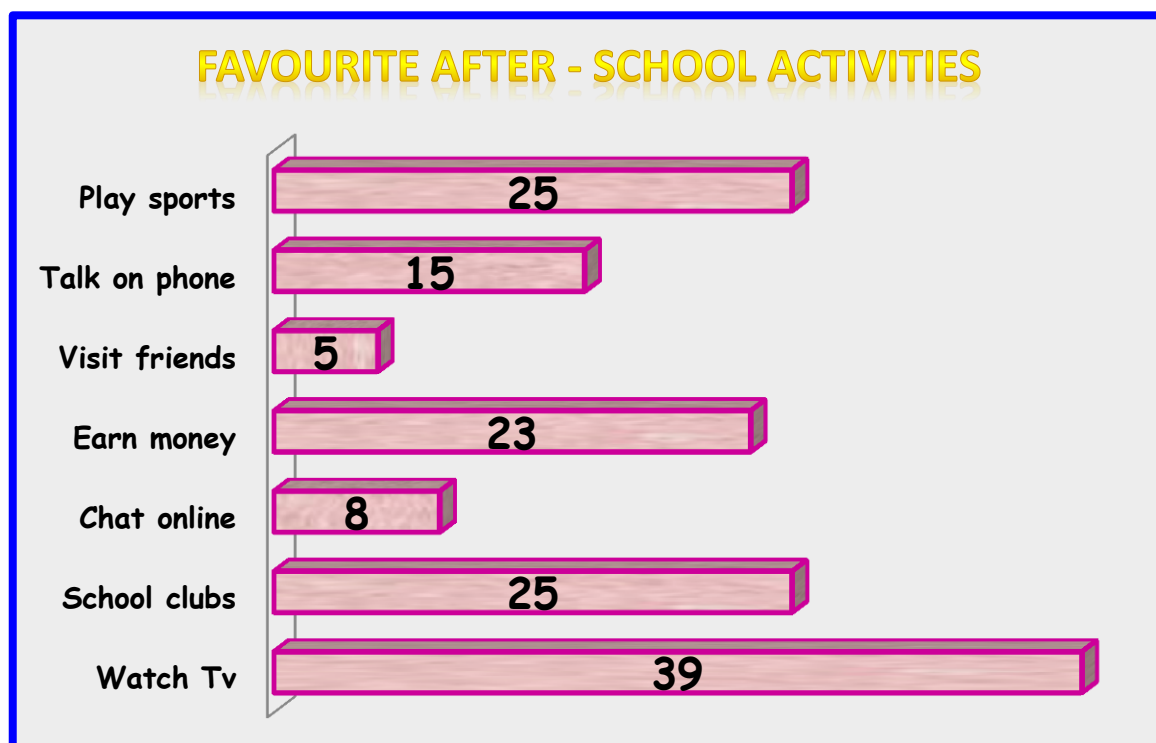
the majority/ the highest/ the most/ more/ less/ number of students/ equal/ the least



(10 marks)

02. The following bar graph shows the favourite after school activities of grade 10 students of your school. Study the chart and write a description about it. Use about 100 words. The following words will help you.

majority/ minority/ more popular than/ equal number/
least popular/ most popular/ highest number/ lowest



(10 marks)