



පළාත් අධ්‍යාපන දෙපාර්තමේන්තුව සබරගමුව - සති පාසල

Subject-ICT

Week- 9th week

Grade-6

Prepared by-M.M.S.B Megasooriya

01) What is an input tactic?

02) Name the input strategy below



03) Connect

.docx	Safe disposal of electronic waste
Ubuntu	A communication tactic
3R	An extension of a file
Router	Is the main memory of the computer
RAM	An operating system

04) When solving a problem, briefly state the input output, the process.

Input -.....
 Output-.....
 process -.....

05) Here are the steps to follow when making a milk tea .Out of them, select the steps related to the input process and output and write them in front of the relevant English letter / letters.

- A. A. Supply of essential substances such as water, tea, sugar and milk powder
 - B. Drainage of water
 - C. Adding tea leaves to the boiled water
 - D. Mix milk powder and sugar
 - E. Add the prepared infusion tea to the above mixture
 - F. Mix everything and make a cup of tea

- Input -.....
- Output-.....
- Process-.....

06) Write the relevant input output, process to get the sum of two numbers.

- Input-.....
- Output-.....
- Process-.....

07) What is an algorithm?

.....

.....

Write an algorithm to get the sum of two numbers.

.....

.....

.....

.....




08) What is a flow chart?

.....

.....

.....

09) Name the following codes used for flow charts.

Symbols	use
	
	
	

10) Draw a flow chart to get the sum of two numbers using the above symbols.

